

## **Recruitment to the Post of “Assistant Registrar”**

**Time Allowed: 120 Minutes**

**Maximum Marks: 200**

**Registration ID:** \_\_\_\_\_

**Name of the Candidate:** \_\_\_\_\_ **Roll No.** \_\_\_\_\_

Serial Number of the Response Evaluation Sheet

\_\_\_\_\_  
Signature of Candidate

\_\_\_\_\_  
Signature of Invigilator

### **INSTRUCTIONS TO THE CANDIDATES:**

1. *This booklet consists of **page numbers 1-11 pages and 100 questions**. Please check that this Question Booklet does not have any missing or torn pages or items, if so, get it replaced by another Question Booklet.*
2. *You have to mark all your responses **ONLY** on the separate Response Sheet provide. It should not be folded or mutilated. No additional Response Sheet shall be provided.*
3. *Use only Black Ball point pen for filling all particulars of Question Booklet, Response Sheet as well as **darkening the circle** of the Response in the Response Sheet.*
4. *This Question Booklet contains **100 Multiple Choice Questions** and each question is followed by four alternative answer options for examples A, B, C and D out of **which only one most appropriate option is** to be chosen. You need to darken thee most appropriate correct circle of the Response Sheet by black ball point pen.*
5. *For each question, darken only one circle on the Response Evaluation Sheet. If you darken more than one circle or darken a circle partially, the answer will be treated as incorrect. Cutting, Alterations/ **Corrections** are not permitted. Answers once darkened cannot be changed in the Response Sheet. If you do not wish to attempt a question, leave all the circles in corresponding row blank and in such condition zero marks will be awarded for that question.*
6. *Every correct answer will be awarded 2 marks and  $\frac{1}{4}$  marks will be deducted for each wrong answer. **No marks for non-attempted questions would be assigned.***
7. *Use of **Electronic Gadgets**, Pager, Mobile Phone, Calculator etc. are strictly prohibited. Use of Unfair Means will lead to the cancellation of candidature. Do not carry any loose paper.*
8. *Blank spaces and blank pages at the end of this Booklet can be used for Rough Work.*
9. *Strictly adhere to disciplines during the course of examination and you are not permitted to leave the Examination Hall until the end of the test.*

*Return the Question Booklet and Response Sheet to the Invigilator after completion of examination, else your candidature will be treated as cancelled.*

1. Who sets the Bharat stage (BS) emission standards?
  - A. NITI Aayog
  - B. National Green Tribunal
  - C. Indian Pollution Control Association
  - D. Central Pollution Control Board
2. On which date, the 'National Start-up Day' observed in India?
  - A. 11 January
  - B. 16 January
  - C. 17 January
  - D. 27 January
3. Which central armed police force has approved the formation of its first all-women battalion in November 2024?
  - A. BSF
  - B. ITBP
  - C. CISF
  - D. CRPF
4. 'Thang ta', a martial art form is associated with which state of India?
  - A. Mizoram
  - B. Nagaland
  - C. Manipur
  - D. Tripura
5. Business Ready (B-READY) is the flagship report of which organization?
  - A. International Monetary Fund
  - B. World Bank
  - C. United Nations Development Programme
  - D. World Trade Organization
6. National Investigation Agency (NIA) functions under which ministry?
  - A. Ministry of Home Affairs
  - B. Ministry of Defence
  - C. Ministry of Corporate Affairs
  - D. Ministry of Finance
7. Which countries are part of Quad nations?
  - A. United Kingdom, France, Germany and India
  - B. Australia, India, Japan, and United States
  - C. India, Russia, Brazil and Japan
  - D. Ukraine, France, Kuwait and Qatar
8. EmpowHER Biz – Sapno Ki Udaan is an initiative of which institution?
  - A. NITI Aayog
  - B. National Institute of Public Cooperation and Child Development (NIPCCD)
  - C. National Commission for Women (NCW)
  - D. Central Social Welfare Board (CSWB)
9. Which state has achieved the highest number of hospital registrations under the Ayushman Bharat scheme in January 2025?
  - A. Haryana
  - B. Bihar
  - C. Uttar Pradesh
  - D. Odisha
10. A rare carnivorous plant 'Utricularia' has been found at which national park in Rajasthan?
  - A. Darrah National Park
  - B. Desert National Park
  - C. Keoladeo National Park
  - D. Ranthambore National Park
11. What is Hydroclimate Whiplash
  - A. A condition where an extremely wet season is followed by an extremely dry season
  - B. A sudden drop in atmospheric pressure
  - C. A phenomenon of rising sea levels
  - D. A rapid temperature drop over a short period
12. As per Commerce and Industry Ministry, what is the position of India in terms of global coffee production?
  - A. First
  - B. Third
  - C. Fifth
  - D. Seventh

13. Parakram Diwas is celebrated on January 23 to commemorate the birth anniversary of which freedom fighter?
  - A. Bhagat Singh
  - B. Subhash Chandra Bose
  - C. Chandra Shekhar Azad
  - D. Bal Gangadhar Tilak
14. What is the name of the tree that recently received digital protection through geo-tagging in Kashmir?
  - A. Chinar tree
  - B. Deodar tree
  - C. Pine tree
  - D. Kail tree
15. Transitioning Industrial Clusters Initiative is associated with which organization?
  - A. International Monetary Fund (IMF)
  - B. United Nations Development Programme (UNDP)
  - C. Reserve Bank of India (RBI)
  - D. World Economic Forum (WEF)
16. Asian Waterbird Census 2025 is conducted by which organization?
  - A. Society for Environment and Development (SED)
  - B. Bombay Natural History Society (BNHS)
  - C. Aranya Environment Organization
  - D. Greenpeace India
17. Which institution recently extracted silicon carbide from simulated moon soil?
  - A. IIT Bombay
  - B. IIT Kanpur
  - C. IIT Madras
  - D. IIT Delhi
18. How many people have been announced to be given the Padma Award by the government of India in 2025?
  - A. 116
  - B. 121
  - C. 130
  - D. 139
19. The mean of five observations is 4 and their variance is 5.2. If three of these given 5 observations are 1, 2, and 6, then the product of the other two is
  - A. 12
  - B. 24
  - C. 28
  - D. 46
20. If we add two irrational numbers the resulting number
  - A. Is always a rational number
  - B. Is always an irrational number
  - C. May be a rational or an irrational number
  - D. Always an integer
21. If  $P(A) = 0.4$ ,  $P(B) = 0.8$  and  $P(B|A) = 0.6$  then  $P(A \cup B)$  is equal to
  - A. 0.24
  - B. 0.3
  - C. 0.48
  - D. 0.96
22. The sum of two numbers is 192. If one-fourth of the one exceeds one-seventh of the other by 4, find the bigger number.
  - A. 112
  - B. 122
  - C. 132
  - D. 142
23. In an exam, there are 250 questions. A student got 2 marks for every correct answer and a deduction of 0.5 marks for every wrong answer. If he gets total 300 marks then, find the number of wrong answers.
  - A. 60
  - B. 70
  - C. 75
  - D. 80
24. The cost of 24 bats and 32 hockey sticks is Rs. 8400. What is the cost of 3 bats and 4 hockey sticks?
  - A. Rs. 1050
  - B. Rs. 2100
  - C. Rs. 4200
  - D. More than one of the above

25.  $\frac{3}{4}$  part of tank is full of water. When 30 litres of water is taken out it becomes empty. The capacity of the tank is?

- A. 24 litres
- B. 32 litres
- C. 36 litres
- D. 40 litres

26. Find the number of trailing zeroes in  $10 \times 20 \times 30 \times \dots \times 1000$ .

- A. 100
- B. 112
- C. 124
- D. 148

27. One bell rings for every 6 minutes. Another bell rings for every 8 minutes. The third bell rings for every 9 minutes. After how many minutes all the three bells will ring together?

- A. 50 minutes
- B. 72 minutes
- C. 144 minutes
- D. 216 minutes

28. The HCF and LCM of two numbers are 25 and 150 and the numbers are in the ratio of 1 : 6. Find the greater of the two numbers.

- A. 125
- B. 150
- C. 200
- D. 175

29. The angles of a triangle are in the ratio 3: 4: 5. The greatest angle will be

- A.  $45^\circ$
- B.  $60^\circ$
- C.  $75^\circ$
- D.  $100^\circ$

30. Four prime numbers are arranged in ascending order. The product of first three is 1001 and that of last three is 2431. The largest prime number is —

- A. 11
- B. 13
- C. 17
- D. 19

31. What is the probability that a leap year has 53 Sundays and 52 Mondays?

- A.  $\frac{1}{7}$
- B.  $\frac{2}{7}$
- C.  $\frac{5}{7}$
- D.  $\frac{6}{7}$

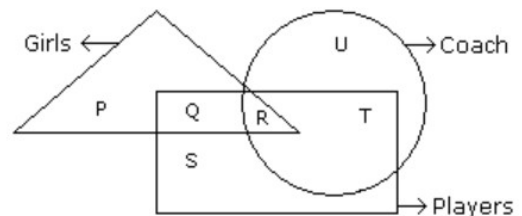
32. The greatest number, which on dividing 1657 and 2037 leaves remainders 6 and 5, respectively:

- A. 127
- B. 117
- C. 27
- D. 17

33. The compound interest on Rs. 30,000 at 7% per annum is Rs. 4347. The period (in years) is:

- A. 1
- B. 2
- C. 3
- D. 4

34. In the following figure triangle represents 'girls', square players and circle-coach. Which part of the diagram represents the girls who are player but not coach?



- A. P
- B. Q
- C. R
- D. S

35. A dishonest merchant sells goods at a 12.5% loss on the cost price, but uses 28 g weight instead of 36 g. What is his percentage profit or loss?

- A. 6.25% loss
- B. 10.5% loss
- C. 8.75% gain
- D. 12.5% gain

36. A and B invested money in a business in the ratio of 7:5. If 15%

of the total profit goes for charity,  
and A's share in the profit is Rs.  
5950, then what is the total profit?

- A. Rs. 10,500
- B. Rs. 11,750
- C. Rs. 12,000
- D. Rs. 12,500

37. A car travels at a speed of 24 km/hr  
and covers a distance of 84 km.  
After that, the car increases its speed  
by 25% and covers the next 150 km.  
What is the total time taken for the  
entire journey?

- A. 8.5 hours
- B. 9.25 hours
- C. 10.75 hours
- D. 11.5 hours

38. There is a rectangular garden of 220  
metres x 70 metres. A path of width  
4 metres is built around the garden.  
What is the area of the path?

- A. 1836 metre<sup>2</sup>
- B. 1872 metre<sup>2</sup>
- C. 2162 metre<sup>2</sup>
- D. 2384 metre<sup>2</sup>

39. A, P, R, X, S and Z are sitting in a  
row. S and Z are in the centre. A  
and P are at the ends. R is sitting  
to the left of A. Who is to the right of  
P?

- A. A
- B. X
- C. Z
- D. S

40. If January is called "March", March  
is called "April" and April is called  
"May", then which of the following  
months will have only 30 days?

- A. January
- B. March
- C. April
- D. May

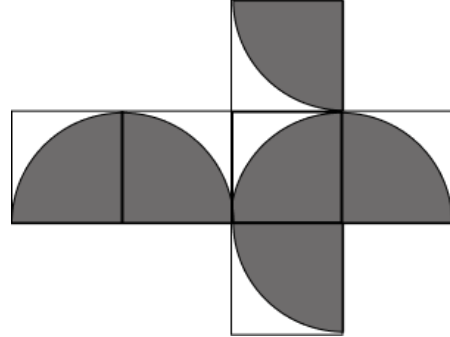
41. If CHAIR is written as '12345',  
RENT is written as '5678', and  
then REAR is written as :

- A. 5635
- B. 5356
- C. 5365
- D. 5653

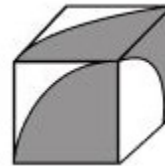
42. Pick out the odd one from the  
following options :

- A. Banana
- B. Grape
- C. Orange
- D. Pomegranate

43. Which of the four options represents  
the cube in its folded form?



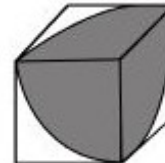
A.



B.



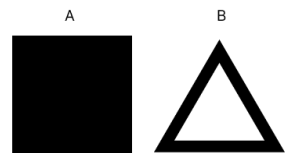
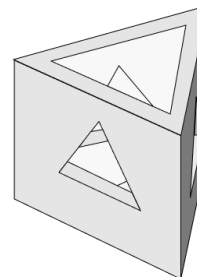
C.



D.



44. Which of the shadows on the right  
can result from casting light on one  
of the 3D-shape's sides?



A. A

B. B

C. Both

D. None of the above

45. Which of the following terms follows the trend of the given list?

ABABACCB, ABABCCAB,  
ABACCBAB, ABCCABAB,  
ACCBABAB, \_\_\_\_\_.

- A. ABABABCC
- B. CCABABAB
- C. ABABACCB
- D. ABABCCAB

46. Hansh's birthday is on Monday 5th June. On what day of the week will be Tushar's Birthday in the same year if Tushar was born on 11th December?

- A. Sunday
- B. Wednesday
- C. Monday
- D. Tuesday

47. Six friends are sitting in a circle facing the centre of the circle. Deepa is between Prakash and Pankaj. Priti is between Mukesh and Lalit. Prakash and Mukesh are opposite to each other

Who is sitting right to Prakash?

- A. Mukesh
- B. Deepa
- C. Pankaj
- D. Lalit

48. In a certain code language, '-' represents '+', '+' represents 'x', 'x' represents '÷' and '÷' represents '-'. Find out the answer to the following question.

$$9 - 18 + 35 \times 10 \div 30 = ?$$

- A. 44
- B. 42
- C. 41
- D. 40

49. In the question two statements are given, followed by two conclusions, I and II. You have to consider the statements to be true even if it seems to be at variance from commonly known facts.

You have to decide which of the given conclusions, if any, follows from the given statements

Statement I: Some games are sports

Statement II: No exercise are games

Conclusion I: All sports are exercise

Conclusion II: Some exercise are sports

- A. Only conclusion I follows
- B. Only conclusion II follows
- C. Both conclusions I and II follow
- D. Neither conclusion I nor conclusion II follows

50. Select the related word/ letters/ number from the given alternatives.

$$4 : 44 :: ? : 77$$

- A. 3
- B. 5
- C. 6
- D. 7

51. A series is given with one term missing. Choose the correct alternative from the given ones that will complete the series.

$$200, 100, 50, 25, 12.5, 6.25, ?$$

- A. 3.125
- B. 3.025
- C. 2.125
- D. 2.025

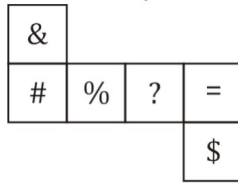
52. A boy travels 4 km towards south and then takes a right turn travels another 3 km in that direction. How far and in which direction is he now from his original position?

- A. 6 km, south
- B. 5 km, southeast
- C. 4 km, north
- D. 5 km, northwest

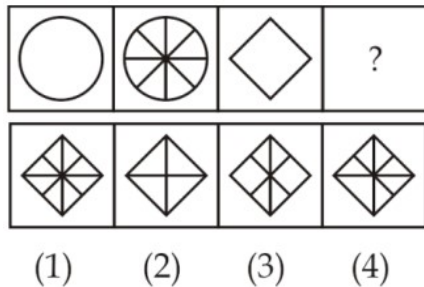
53. If  $81 \# 49 = 2$  and  $100 \# 36 = 4$  then  $144 \# 196 = ?$

- A. -2
- B. 2
- C. -26
- D. 26

54. Which symbol lie opposite to the face having symbol '%', when the figure is folded to form a cube?



- A. #  
B. \$  
C. =  
D. &
55. Select a suitable figure from the answer figures that would replace the question mark (?)



- A. 1  
B. 2  
C. 3  
D. 4
56. Find the missing number from the given series?
- 10, 12, 22, 34, ?, 90
- A. 36  
B. 46  
C. 56  
D. 66
57. Euphemism helps writers to convey those ideas which have become a social \_\_\_\_\_ and are too embarrassing to mention directly.
- A. Norm  
B. Taboo  
C. Custom  
D. Ideology

58. Match List I with List II

List I (Word)		List II (Type of pronoun)	
A.	what	I.	reflexive
B.	Myself	II.	relative
C.	His	III.	indefinite
D.	Somewhere	IV.	possessive

Choose the most appropriate answer from the options given below:

- A. A-II, B-I, C-IV, D-III  
B. A-I, B-III, C-II, D-IV  
C. A-III, B-I, C-IV, D-II  
D. A-IV, B-II, C-I, D-III
59. If the room had been brighter, I would have been able to read for a while before bed time.
- A. If the room was brighter  
B. If the room are brighter  
C. Had the room been brighter  
D. No improvement
60. There are not many men who are so famous that they are frequently referred to by their **short names** only
- A. initials  
B. signatures  
C. middle names  
D. No correction required
61. Select the pair which has the same relationship. THRUST:SPEAR
- A. MANGLE:IRON  
B. SCABBARD:SWORD  
C. BOW:ARROW  
D. FENCE:EPEE
62. Arrange to form a sentence
1. of  
2. we  
3. heard  
4. him  
5. had
- A. 42351  
B. 52341  
C. 25341  
D. 25314

63. S1: Smoke oozed up between the planks.

P: Passengers were told to be ready to quit the ship.

Q: The rising gale fanned the smouldering fire.

R: Everyone now knew there was fire on board.

S: Flames broke out here and there

S6: Most people bore the shock bravely.

The proper sequence should be

- A. SRQP
- B. QPSR
- C. RSPQ
- D. QSRP

64. Our sir teaches Mathematics ..... English.

- A. across
- B. besides
- C. beside
- D. both

65. The English ..... English.

- A. speak
- B. spoke
- C. spoken
- D. is spoken

66. You can check the conditions against \_\_\_\_\_ when applying conditional formatting

- A. Cell value
- B. Formula
- C. Both of above
- D. None of above

67. Which of the following option is not available in Paste Special dialog box?

- A. Add
- B. Subtract
- C. Divide
- D. SQRT

68. The intersection areas of Rows and Columns in spreadsheet are called?

- A. Box

B. Cells

C. Line

D. None of the above

69. What is Gutter Margin?

- A. Margin that is added to the left margin when printing.
- B. Margin that is added to the right margin when printing
- C. Margin that is added to the binding side of Page when printing
- D. Margin that is added to the outside of the page when printing

70. Which of the following is the shortcut key to open a 'New Blank' document in MS-Word?

- A. CTRL+B
- B. CTRL+M
- C. CTRL+D
- D. CTRL+N

71. Which function key displays the Print Preview window in Microsoft Office?

- A. Alt + Ctrl + F2
- B. Alt + F2
- C. Shift + F2
- D. Ctrl + F2

72. When sender and receiver of an e-mail are on same system, we need only two \_\_\_\_\_.

- A. IP
- B. Servers
- C. Users
- D. Domain

73. \_\_\_\_\_ feature of email lets you add your name and contact information automatically at the bottom of every email

- A. Signature
- B. Logo
- C. Salutation
- D. Watermark

74. What is maximum file size that can be attached to email in Gmail?

- A. 25 MB
- B. 50 MB
- C. 100 MB
- D. 200 MB



75. Which of the following represents the Two-Factor Authentication (2FA)?
- A technique for organizing files and folder on a PC
  - The use of two different credentials to verify identity
  - A tool for optimizing system resources
  - None of the above
76. Under which of the following circumstances a Government servant be placed under suspension?
- For attending office late
  - For a case against him in respect of any criminal offence
  - For disobedience
  - For petty quarrels amongst the Government servants
77. When a government servant who is on leave is called to give evidence in an inquiry, which of the following sentences is correct?
- The time spent shall be treated as leave and he shall not be deemed to have been recalled to duty
  - He will be treated as on duty
  - He will be paid TA as on tour under SR 154
  - He can refuse to attend the inquiry
78. Which of the following comes under lack of integrity?
- Bribery or corruption
  - Misbehavior
  - Unbecoming a Government servant
  - None of the above
79. To avail Education allowance for disabled children, what is the validity period of a disability certificate in cases where disability is temporary?
- 2 years
  - 5 years
  - 7 years
  - 10 years
80. Name the activity which does not require sanction/ permission of the prescribed authority.
- To join as volunteers in Civic Defense Service
  - To accept gifts from near relatives and personal friends when the value exceeds prescribed limits
  - To accept fee for work done for any private or public body or person
  - To participate in 'shramdhan' organized by Government departments of the Bharat Sevak Samaj during spare time
81. Name the act from the following, which does not amount to taking part in politics and elections by a Government servant-
- Participation in demonstrations organized by political parties
  - Acting as election agent
  - Proposing/ seconding the nomination of a candidate at an election
  - Assisting in the conduct of an election in the due performance of the duty imposed on him
82. What does Article 15 of the Indian constitution specifically prohibit?
- It prohibits discrimination on grounds of professional qualification and economic status
  - It mandates equal pay for equal work for both men and women across all fields
  - It prohibits the state from denying access to public places to any citizen on grounds only of religion, race, caste, sex, place of birth, or any of them
  - It allows the state to make any special provisions for the advancement of socially and educationally backward classes or for the Scheduled Castes and Scheduled Tribes

83. Which fundamental right will the following situation violate if a 13-year-old child is working in a carpet manufacturing factory?
- Right to freedom
  - Right against exploitation
  - Cultural and educational rights
  - Right to equality
84. An Administrator to whom powers have been delegated under special order of the President may waive recovery of an amount overpaid mistakenly to a Government servant if-
- Recovery is impossible
  - Recovery will cause undue hardship
  - The amount was drawn under a reasonable belief that he was entitled to it
  - Any one of the above
85. Which of the following conditions are to be satisfied for dismantlement of a public building by a Department of the Central Government?
- It must not be required by any other department of the Central government
  - It must be certified to be structurally in a dangerous condition
  - It must be purely temporary structure
  - All the above
86. When should re-appropriation of funds not be made during a financial year without the prior approval of Ministry of Finance?
- First quarter
  - Second quarter
  - Third quarter
  - Fourth quarter
87. When loss of Government money arises due to erroneous or irregular issue of cheques, it should be reported to-
- Head of the Department
  - Head of Office
  - Controller-General of Accounts
  - Comptroller and Auditor-General
88. After finalization of the estimates for Budgetary allocations by the Department of Expenditure, whose consultation is necessary to prepare an Outcome Budget statement?
- Prime Minister of India
  - President of India
  - NITI Aayog
  - Vice-President of India
89. The report of C&AG along with the accounts of the Union Government will be submitted to-
- Finance Minister of India
  - Prime Minister of India
  - President of India
  - Controller-General of Accounts
90. At what rate is HRA admissible during joining Time?
- At the rate applicable to old station from where the Government servant was transferred
  - At the rate applicable to the new station to which transferred
  - Higher of the rates applicable in both the stations
  - Lower of the rates applicable in both the station
91. What does the term 'relative' in relation to an individual mean?
- Spouse
  - Brother of sister
  - Any lineal ascendant or descendant
  - All the above
92. Salaries chargeable to Income Tax includes
- Salary due from an employer in the previous year
  - Salary, though not due, paid in the previous year
  - Arrears of salary paid in the previous year, if not charged to Income tax for any earlier years
  - All the above

93. Which of the following will not be considered as income?
- A. Reimbursement of expenses on grocery
  - B. Reimbursement of children's education
  - C. Gratuity received on retirement by a Government employee
  - D. Pension scheme
94. What is the date of retirement of a Government servant?
- A. Afternoon of the last day of the month in which he attains the age of superannuation
  - B. Last day of any month in which he wishes to retire
  - C. Last working day
  - D. First day of the month in which he attains the age of superannuation
95. Under what grounds, prefix/ suffix of holidays to leave are allowed automatically?
- A. On private grounds
  - B. On medical grounds
  - C. Both private and medical grounds
  - D. None of above
96. Under what circumstances Leave Not Due is admissible to a Government servant?
- A. When EL is not at his credit
  - B. When HPL is not at his credit
  - C. When casual leave is not at his credit
  - D. When commuted leave is not at his credit
97. What are the components admissible for computation of encashment of leave salary on the date of availing LTC?
- A. Pay, DA and HRA
  - B. Pay only
  - C. Pay plus DA only
  - D. Pay plus other allowances
98. What is the maximum amount of LTC advance granted to the Government servants?
- A. Four-fifths of the cost of the journey
  - B. Up to 90% of the estimated fare
  - C. 50% of the cost of the journey
  - D. 75% of the estimated fare
99. A Resolution published in the Gazette of India contains-
- A. Public announcement of Government decisions in important matters of policy
  - B. Financial sanctions and final orders in disciplinary cases
  - C. Routine administrative matters
  - D. Promulgation of statutory rules and order
100. What is the percentage of deduction of GPF for Government servants joining after 01-01-2004?
- A. 6
  - B. 10
  - C. 14
  - D. No deduction